



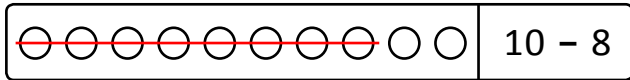
NAME _____ DATE _____

SUBTRACTIONS

Make a math drawing and subtract. Write the related subtraction sentence and complete the number bond.

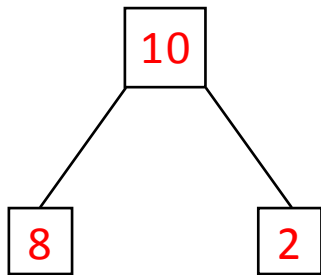
Example:

$$10 - 8 = \underline{2}$$

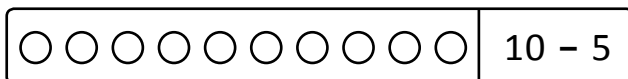


Related subtraction sentence:

$$10 - 2 = \underline{8}$$

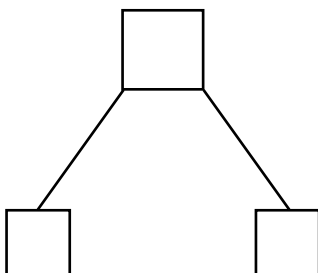


a) $10 - 5 = \underline{\quad}$

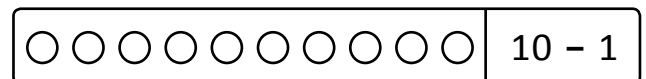


Related subtraction sentence:

$$10 - 5 = \underline{\quad}$$



b) $10 - 1 = \underline{\quad}$



Related subtraction sentence:

$$10 - 9 = \underline{\quad}$$

